


ANSWERS WILL VARY

Name _____

Date _____

Use a ruler and a right angle tool to help you draw the figures with the given attributes below.

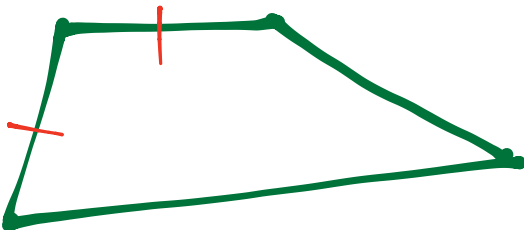
1. Draw a triangle that has no right angles.



2. Draw a quadrilateral that has at least 2 right angles.

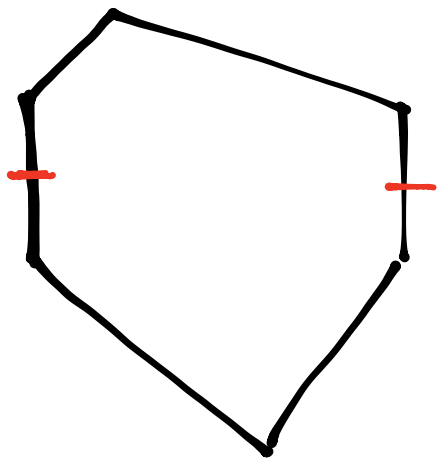


3. Draw a quadrilateral with 2 equal sides. Label the 2 equal side lengths of your shape.

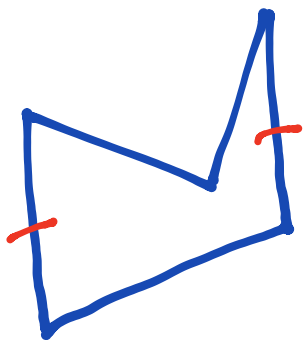


ANSWERS WILL VARY

4. Draw a hexagon with at least 2 equal sides. Label the 2 equal side lengths of your shape.



5. Draw a pentagon with at least 2 equal sides. Label the 2 equal side lengths of your shape.



6. Cristina describes her shape. She says it has 3 equal sides that are each 4 centimeters in length. It has no right angles. Do your best to draw Cristina's shape and label the side lengths.

