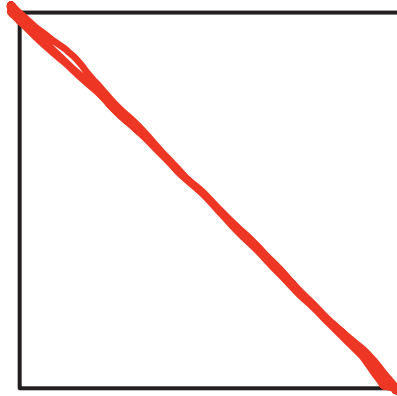


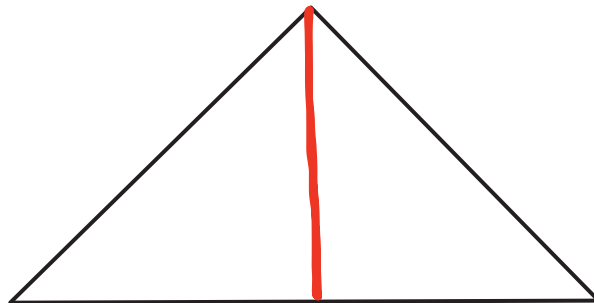
Name _____

Date _____


1. Draw a line to divide the square below into 2 equal triangles.



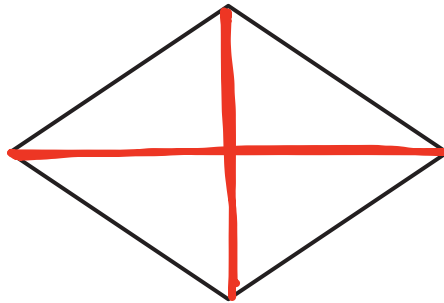
2. Draw a line to divide the triangle below into 2 equal, smaller triangles.



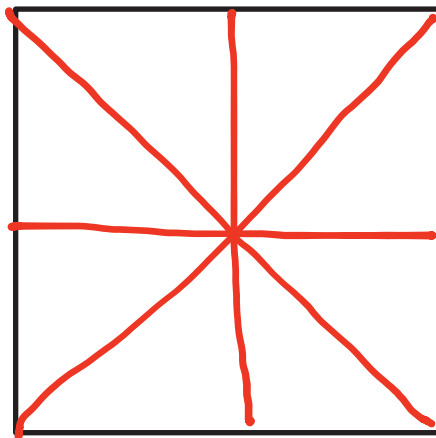
3. Draw a line to divide the trapezoid below into 2 equal trapezoids.



4. Draw 2 lines to divide the quadrilateral below into 4 equal triangles.



5. Draw 4 lines to divide the square below into 8 equal triangles.



6. Describe the steps you took to divide the square in Problem 5 into 8 equal triangles.

ANSWERS WILL VARY

First I drew the two diagonals. Then I drew the vertical and horizontal lines.